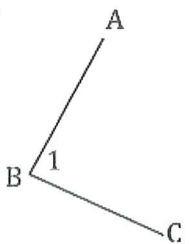
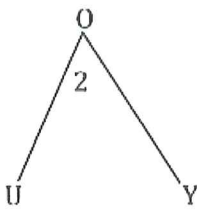
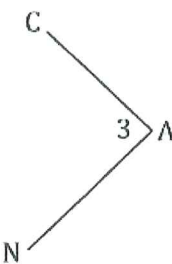


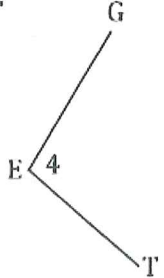
## Naming Angles Practice<sup>2</sup>

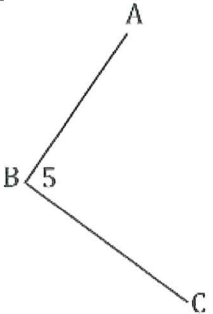
*Circle the answer choice that could NOT be used to name the angle.*

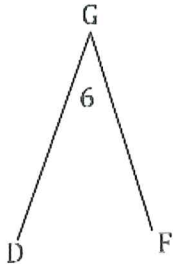
1.  A.  $\angle B$   
B.  $\angle ABC$   
C.  $\angle ACB$   
D.  $\angle 1$

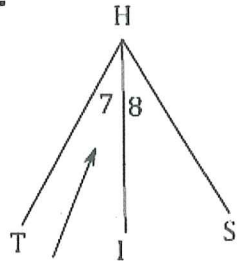
2.  A.  $\angle 2$   
B.  $\angle YUO$   
C.  $\angle YOU$   
D.  $\angle UOY$

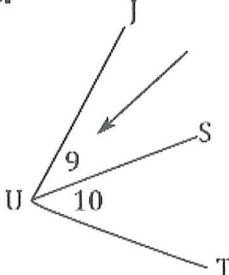
3.  A.  $\angle CNA$   
B.  $\angle 3$   
C.  $\angle NAC$   
D.  $\angle CAN$

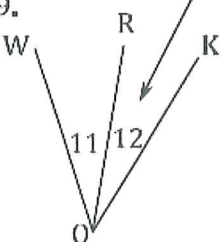
4.  A.  $\angle E$   
B.  $\angle GET$   
C.  $\angle TEG$   
D.  $\angle TGE$

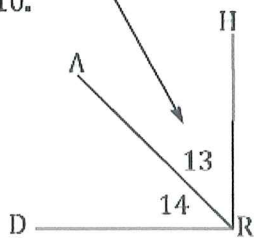
5.  A.  $\angle B$   
B.  $\angle CAB$   
C.  $\angle ABC$   
D.  $\angle 5$

6.  A.  $\angle DFG$   
B.  $\angle 6$   
C.  $\angle G$   
D.  $\angle DGF$

7.  A.  $\angle 7$   
B.  $\angle H$   
C.  $\angle THI$   
D.  $\angle IHT$

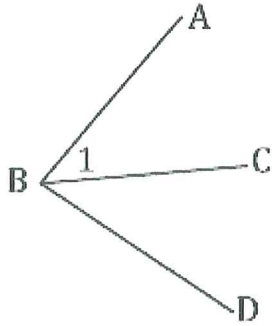
8.  A.  $\angle 9$   
B.  $\angle SUJ$   
C.  $\angle JUS$   
D.  $\angle U$

9.  A.  $\angle O$   
B.  $\angle KOR$   
C.  $\angle ROK$   
D.  $\angle 12$

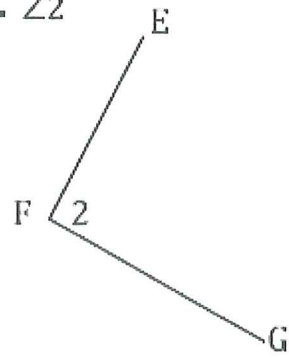
10.  A.  $\angle ARH$   
B.  $\angle 13$   
C.  $\angle HRA$   
D.  $\angle R$

Write another name for the indicated angle.

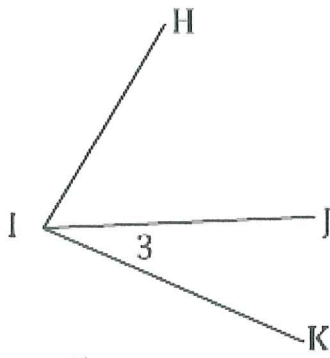
11.  $\angle 1$



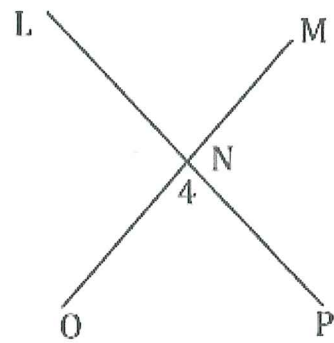
12.  $\angle 2$



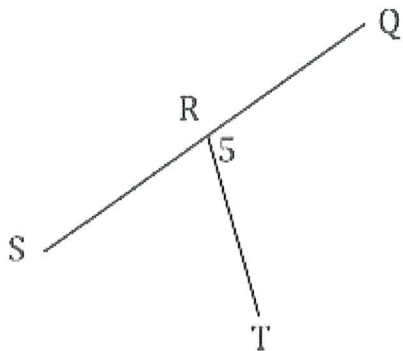
13.  $\angle 3$



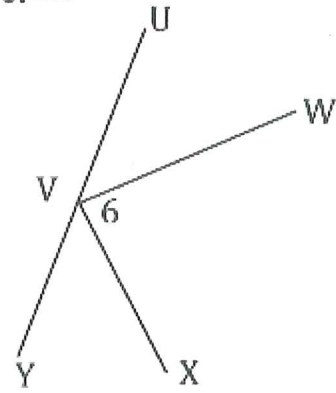
14.  $\angle 4$



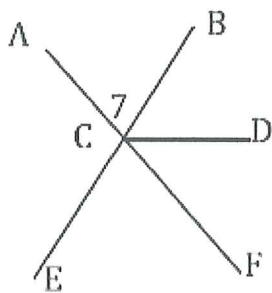
15.  $\angle 5$



16.  $\angle 6$



17.  $\angle 7$



18.  $\angle 8$

