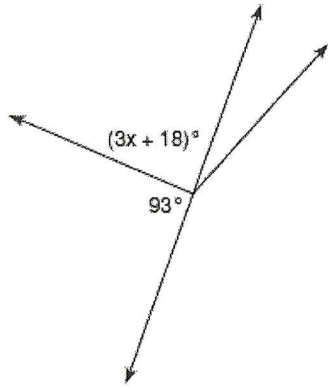
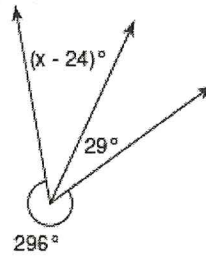


Find the value of x.

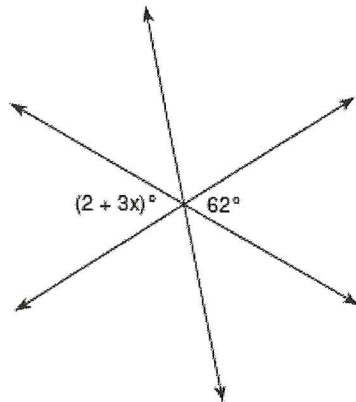
19)



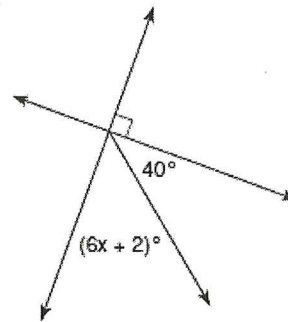
20)



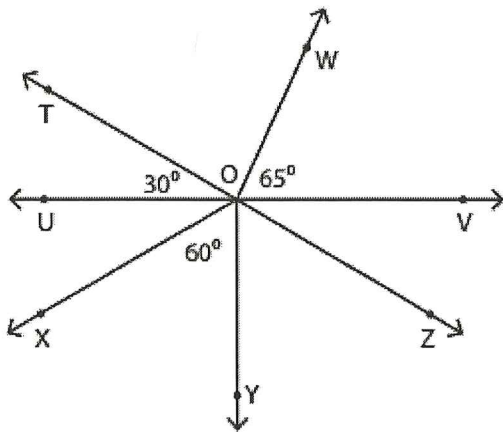
21)



22)



You Try! Answer all the questions using the diagram below



a) Name the angles adjacent to 60° .

b) Find $\angle TOW$.

c) $\angle TOU$ and $\angle ZOV$ are vertical angles. Find $\angle ZOV$.

d) Name the adjacent angles with side OV.
